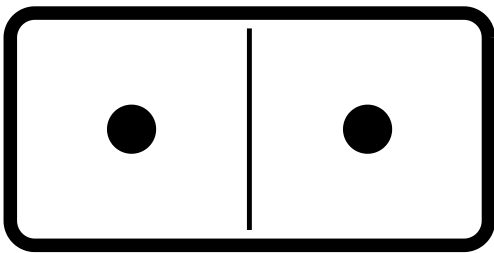



YHTEENLASKUA DOMINO PALIKOILLA

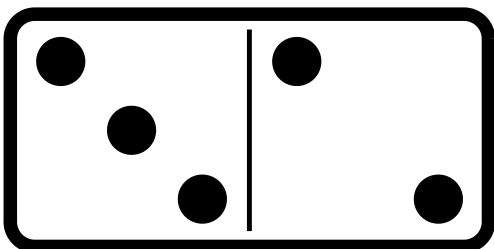
Laske domino palikkojen pisteet ja kirjoita numero. Tee lopuksi yhteenlasku.




$$\square + \square = \square$$



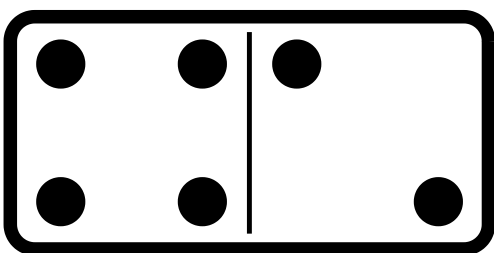
$$\square + \square = \square$$



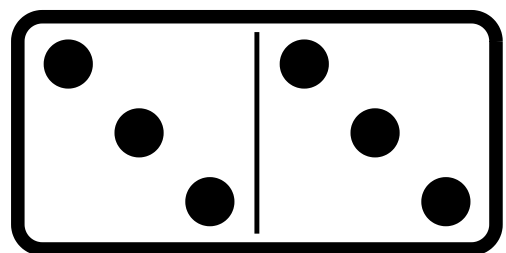
$$\square + \square = \square$$



$$\square + \square = \square$$



$$\square + \square = \square$$



$$\square + \square = \square$$

