





Auta tonttua laskemaan

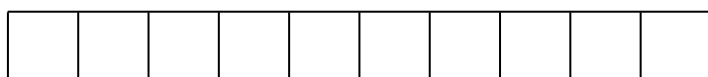
Joulupukki pyysi tonttujaan harjoittelemaan matikkaa. Auta tonttua laskemaan 10 eri tavoilla. Seuraa annettua esimerkkiä ja huomaa, kuinka monella eri tavalla voit laskea 10.




$$\textcircled{4} + \textcircled{6} = 10$$



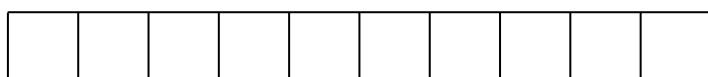
$$\textcircled{\quad} + \textcircled{\quad} = 10$$



$$\textcircled{\quad} + \textcircled{\quad} = 10$$




$$\textcircled{\quad} + \textcircled{\quad} = 10$$



$$\textcircled{\quad} + \textcircled{\quad} = 10$$



$$\textcircled{\quad} + \textcircled{\quad} = 10$$



$$\textcircled{\quad} + \textcircled{\quad} = 10$$



$$\textcircled{\quad} + \textcircled{\quad} = 10$$



$$\textcircled{\quad} + \textcircled{\quad} = 10$$

